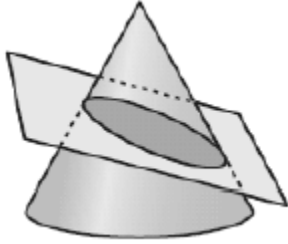


Math 3 Honors Unit 4 Day 9 - Cross Sections

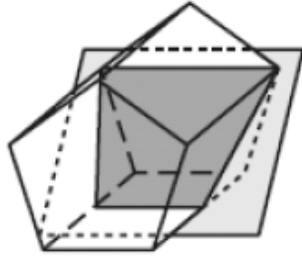
Cross section: _____

Describe Each Cross Section:

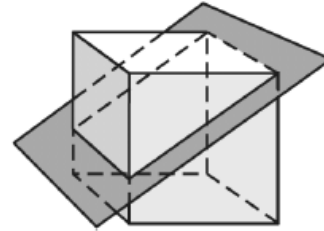
Example 1:



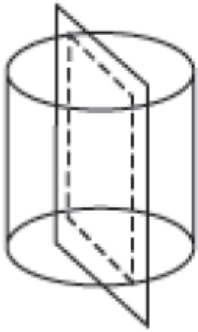
Example 2:



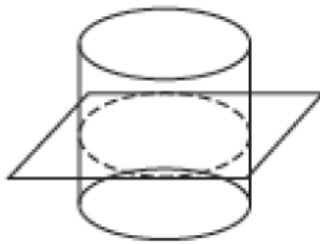
Example 3:



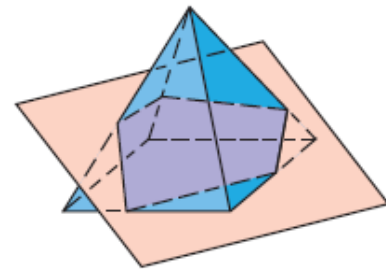
Example 4:



Example 5:



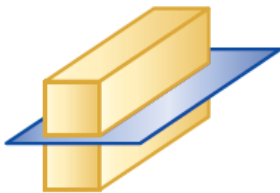
Example 6:



Partner Practice: <https://www.geogebra.org/b/XCZwsytr>

Describe the shape resulting from each cross section.

13.



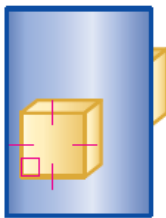
14.



15.



16.



17.



18.



Identify the cross section of this object by circling the correct answer.

